


2けたのたしざんをしよう！


ヒント！

○をつかってかずをかぞえてみてね！

$16 + 0 =$




$16 + 5 =$



$16 + 1 =$




$16 + 6 =$



$16 + 2 =$




$16 + 7 =$



$16 + 3 =$



$16 + 8 =$



$16 + 4 =$



$16 + 9 =$

