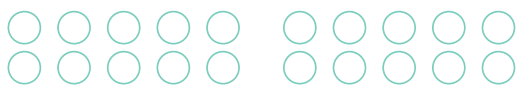


2けたのたしざんをしよう！


ヒント！

○をつかってかずをかぞえてみてね！

$18 + 0 =$




$18 + 5 =$



$18 + 1 =$




$18 + 6 =$




$18 + 2 =$




$18 + 7 =$




$18 + 3 =$



$18 + 8 =$



$18 + 4 =$



$18 + 9 =$

