

2けたのたしざんをしよう！


**ヒント！**

○をつかってかずをかぞえてみてね！


$19 + 0 =$




$19 + 5 =$




$19 + 1 =$




$19 + 6 =$




$19 + 2 =$




$19 + 7 =$




$19 + 3 =$



$19 + 8 =$



$19 + 4 =$



$19 + 9 =$

